

1.

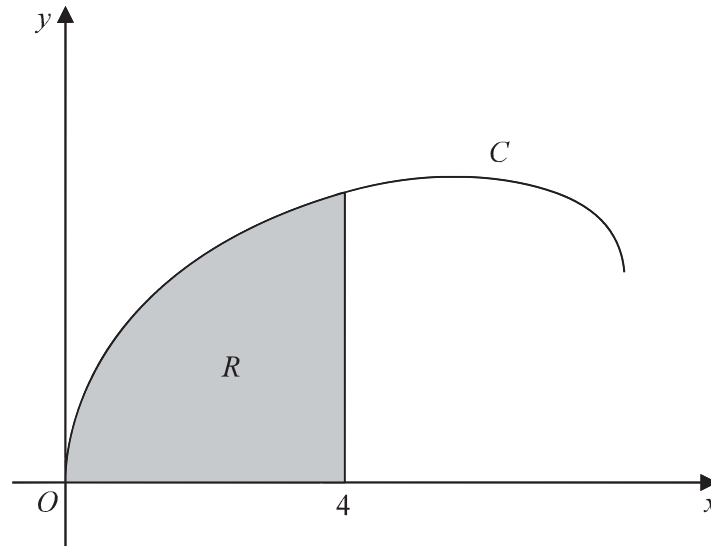


Figure 6

Figure 6 shows a sketch of the curve C with parametric equations

$$x = 8 \sin^2 t \quad y = 2 \sin 2t + 3 \sin t \quad 0 \leq t \leq \frac{\pi}{2}$$

The region R , shown shaded in Figure 6, is bounded by C , the x -axis and the line with equation $x = 4$

(a) Show that the area of R is given by

$$\int_0^a (8 - 8 \cos 4t + 48 \sin^2 t \cos t) dt$$

where a is a constant to be found.

(5)

(b) Hence, using algebraic integration, find the exact area of R .

(4)

$$(a) \quad R = \int_0^a y \frac{dx}{dt} dt$$

$$x = 8 \sin^2 t$$

$$\frac{dx}{dt} = 8 \times 2 \sin t \cos t \\ = 16 \sin t \cos t$$

$$\left. \begin{array}{l} \\ \end{array} \right\} \frac{d}{dx} \sin^2 x = 2 \sin x \cos x \text{ using the} \\ \text{chain rule with } u = \sin x$$

$$y \times \frac{dx}{dt} = (2 \sin 2t + 3 \sin t) \times 16 \sin t \cos t \quad (1)$$

$$\begin{aligned}
 y \times \frac{dx}{dt} &= [2(\sin t \cos t + \cos t \sin t) + 3 \sin t] \times 16 \sin t \cos t \\
 &= (4 \sin t \cos t + 3 \sin t) \times 16 \sin t \cos t \\
 &= (64 \sin^2 t \cos^2 t + 48 \sin^2 t \cos t)
 \end{aligned}$$

$$R = \int_0^a y \frac{dx}{dt} dt = \int_0^a 64 \sin^2 t \cos^2 t + 48 \sin^2 t \cos t dt \quad (1)$$

We need to find a way to simplify this into the required form.

$$\begin{aligned}
 \cos 4t &= 2 \cos^2 2t - 1 \\
 &= 2(1 - \sin^2 2t) - 1 \\
 &= 2 - 2 \sin^2 2t - 1 \\
 &= 1 - 2 \sin^2 2t \\
 &= 1 - 2(\sin 2t \sin 2t) \\
 &= 1 - 2(2 \sin t \cos t \times 2 \sin t \cos t) \\
 &= 1 - 2(4 \sin^2 t \cos^2 t) \\
 &= 1 - 8 \sin^2 t \cos^2 t \quad (1)
 \end{aligned}$$

$\left. \begin{aligned} \sin^2 x + \cos^2 x &= 1 \\ \cos^2 x &= 1 - \sin^2 x \end{aligned} \right\}$
 $\left. \begin{aligned} \text{using } \sin(2x) &= 2 \sin x \cos x \end{aligned} \right\}$

$$8 \sin^2 t \cos^2 t = 1 - \cos 4t \quad \left. \begin{aligned} 64 \sin^2 t \cos^2 t &= 8(1 - \cos 4t) \end{aligned} \right\}$$

$$R = \int_0^a 8 - 8 \cos 4t + 48 \sin^2 t \cos t dt \quad (1)$$

$$a = \frac{\pi}{4} \quad (1)$$

Finding the new domain:

$$R = \int_0^4 y dx = \int y \frac{dx}{dt} dt$$

$$x = 8 \sin^2 t \rightarrow \frac{dx}{dt} = 16 \sin t \cos t$$

$$\text{when } x = 0, 8 \sin^2 t = 0, \text{ Hence, } t = 0$$

$$\begin{aligned}
 \text{when } x = 4, 8 \sin^2 t = 4 &\rightarrow \sin^2 t = \frac{1}{2} \\
 t = \sin^{-1} \sqrt{\frac{1}{2}} &= \left(\frac{\pi}{4}\right)
 \end{aligned}$$

$$(b) \int_0^{\frac{\pi}{4}} 8 - 8\cos 4t + 48\sin^2 t \cos t \, dt = 8t - 2\sin 4t + 16\sin^3 t \quad (2)$$

$$\left[8t - 2\sin 4t + 16\sin^3 t \right]_0^{\frac{\pi}{4}} = \left[8\left(\frac{\pi}{4}\right) - 2\sin\left(4 \times \frac{\pi}{4}\right) + 16\sin^3\left(\frac{\pi}{4}\right) \right] \\ - \left[8(0) - 2\sin(4 \times 0) + 16\sin^3(0) \right] \quad (1)$$

$$= 2\pi + 4\sqrt{2} \quad (1)$$

2. A curve has equation $y = f(x)$, where

$$f(x) = \frac{7xe^x}{\sqrt{e^{3x} - 2}} \quad x > \ln \sqrt[3]{2}$$

(a) Show that

$$f'(x) = \frac{7e^x(e^{3x}(2-x) + Ax + B)}{2(e^{3x} - 2)^{\frac{3}{2}}}$$

where A and B are constants to be found.

(5)

(b) Hence show that the x coordinates of the turning points of the curve are solutions of the equation

$$x = \frac{2e^{3x} - 4}{e^{3x} + 4}$$

(2)

The equation $x = \frac{2e^{3x} - 4}{e^{3x} + 4}$ has two positive roots α and β where $\beta > \alpha$

A student uses the iteration formula

$$x_{n+1} = \frac{2e^{3x_n} - 4}{e^{3x_n} + 4}$$

in an attempt to find approximations for α and β

Diagram 1 shows a plot of part of the curve with equation $y = \frac{2e^{3x} - 4}{e^{3x} + 4}$ and part of the line with equation $y = x$

Using Diagram 1 on page 42

(c) draw a staircase diagram to show that the iteration formula starting with $x_1 = 1$ can be used to find an approximation for β

(1)

Use the iteration formula with $x_1 = 1$, to find, to 3 decimal places,

(d) (i) the value of x_2

(ii) the value of β

(3)

Using a suitable interval and a suitable function that should be stated

(e) show that $\alpha = 0.432$ to 3 decimal places.

(2)

$$a) f(x) = \frac{7xe^x}{(e^{3x}-2)^{1/2}}$$

$$\frac{d}{dx}(7xe^x): \text{ let } u=7x \quad v=e^x$$

$$\frac{du}{dx} = 7 \quad \frac{dv}{dx} = e^x$$

$$\frac{du}{dx}v + \frac{dv}{dx}u = 7e^x + 7xe^x$$

$$\frac{d}{dx}((e^{3x}-2)^{1/2}) = \frac{1}{2} \times 3e^{3x} \times (e^{3x}-2)^{-1/2}$$

$$= \frac{3}{2}e^{3x}(e^{3x}-2)^{-1/2}$$

$$f(x) = \frac{7xe^x}{(e^{3x}-2)^{1/2}}$$

using quotient rule

$$f'(x) = \frac{(e^{3x}-2)^{1/2}(7e^x+7xe^x) - 7xe^x\left(\frac{3}{2}e^{3x}(e^{3x}-2)^{-1/2}\right)}{e^{3x}-2}$$

$$= \frac{7(e^{3x}-2)^{-1/2} \left[e^x(e^{3x}-2)(1+x) - \frac{3}{2}xe^xe^{3x} \right]}{e^{3x}-2}$$

$$= \frac{7e^x \left[(e^{3x}-2)(1+x) - \frac{3}{2}xe^{3x} \right]}{e^{3x}-2}$$

factoring out $7(e^{3x}-2)^{-1/2}$

factoring out e^x

moving $(e^{3x}-2)^{-1/2}$ to the denominator $\rightarrow (e^{3x}-2)^{3/2}$

Only use the copy of Diagram 1 if you need to redraw your answer to part (c).

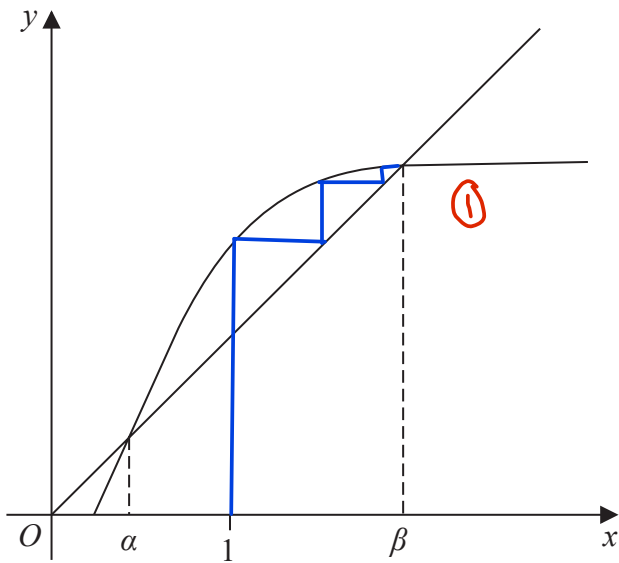
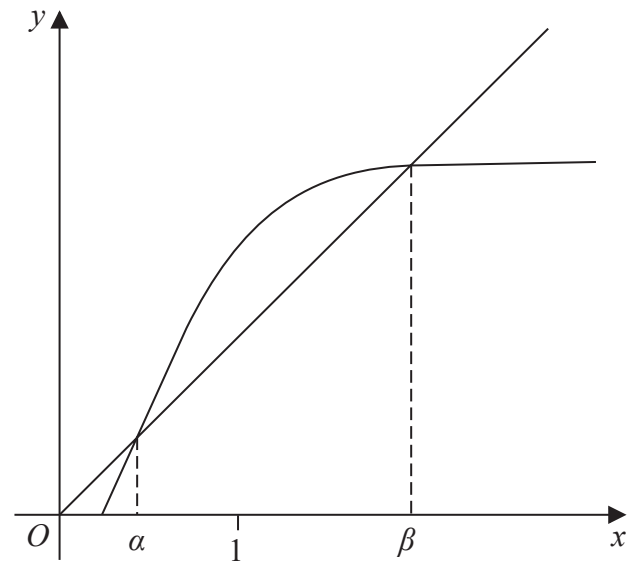


Diagram 1



copy of Diagram 1

$$f'(x) = \frac{7e^x \left[e^{3x} + xe^{3x} - 2 - 2x - \frac{3}{2}xe^{3x} \right]}{(e^{3x} - 2)^{3/2}}$$

expanding bracket

$$= \frac{7e^x \left[e^{3x} - \frac{1}{2}xe^{3x} - 2x - 2 \right]}{(e^{3x} - 2)^{3/2}}$$

collecting like terms

$$= \frac{7e^x (2e^{3x} - xe^{3x} - 4x - 4)}{2(e^{3x} - 2)^{3/2}}$$

multiplying top and bottom by 2

$$= \frac{7e^x (e^{3x}(2-x) - 4x - 4)}{2(e^{3x} - 2)^{3/2}}$$

as required.

b) turning points have $f'(x)=0$

$$\Rightarrow \frac{7e^x (e^{3x}(2-x) - 4x - 4)}{2(e^{3x}-2)^{3/2}} = 0$$

$e^x \neq 0$,
multiply by
 $2(e^{3x}-2)^{3/2}$

$$e^{3x}(2-x) - 4x - 4 = 0$$

$$2e^{3x} - xe^{3x} - 4x - 4 = 0$$

$$x(e^{3x} + 4) = 2e^{3x} - 4 \quad \textcircled{1}$$

$$x = \frac{2e^{3x} - 4}{e^{3x} + 4} \quad \textcircled{1}$$

c) drawn on diagram

$$d) x_{n+1} = \frac{2e^{3x_n} - 4}{e^{3x_n} + 4}$$

$$(i) x_2 = \frac{2e^3 - 4}{e^3 + 4} = 1.50177... \quad \textcircled{1}$$

$$= 1.502 \text{ (3dp)} \quad \textcircled{1}$$

$$(ii) \beta = 1.96757...$$

$$= 1.968 \text{ (3dp)} \quad \textcircled{1}$$

$$e) \alpha \text{ is a solution of } x = \frac{2e^{3x} - 4}{e^{3x} + 4}$$

$$\therefore \text{ a solution of } \frac{2e^{3x} - 4}{e^{3x} + 4} - x = 0$$

so define $h(x) = \frac{2e^{3x} - 4}{e^{3x} + 4} - x$, so $h(\alpha) = 0$.

$$h(0.4315) = -0.000297... < 0$$

$$h(0.4325) = 0.000947 > 0 \quad (1)$$

- since there is a change of sign
- and $h(x)$ is continuous
- $\alpha = 0.432$ (to 3dp) (1)

3. In this question you must show all stages of your working.

Solutions relying on calculator technology are not acceptable.

A curve has equation

$$x^3 + 2xy + 3y^2 = 47$$

(a) Find $\frac{dy}{dx}$ in terms of x and y

(4)

The point $P(-2, 5)$ lies on the curve.

(b) Find the equation of the normal to the curve at P , giving your answer in the form $ax + by + c = 0$, where a , b and c are integers to be found.

(3)

$$a) \quad x^3 + 2xy + 3y^2 = 47$$

$$3x^2 + 2y + 2x \frac{dy}{dx} + 6y \frac{dy}{dx} = 0$$

$$\frac{dy}{dx} (2x + 6y) = -3x^2 - 2y$$

$$\frac{dy}{dx} = -\frac{3x^2 + 2y}{2x + 6y}$$

$$b) \quad P(-2, 5)$$

$$\left. \frac{dy}{dx} \right|_{\substack{x=-2 \\ y=5}} = -\frac{3(-2)^2 + 2(5)}{2(-2) + 6(5)} = -\frac{11}{13}$$

$$\therefore m_{\text{normal}} = \frac{13}{11}$$

$$y - 5 = \frac{13}{11} (x + 2)$$

$$11y - 55 = 13x + 26$$

$$13x - 11y + 81 = 0$$